



Subtraction


จงหาผลลัพธ์ โดยการกา X ออก



$$- 3 = \boxed{7}$$



$$- 4 = \boxed{}$$




$$- 0 = \boxed{}$$




$$- 5 = \boxed{}$$



$$- 1 = \boxed{}$$



$$- 3 = \boxed{}$$



$$- 2 = \boxed{}$$



$$- 8 = \boxed{}$$